




# SECTION 2 | Test 1


## A Answer


1  How many sticks? \_\_\_\_\_



2  Write the number of cubes in words. \_\_\_\_\_

3 Draw beads on the abacus to show the number eleven. 

4 The total value of the money is £11. What is missing? £ \_\_\_\_\_



5  How much more do you need to make 20p? \_\_\_\_\_ p

6 You have . You spend .

How much have you got left? \_\_\_\_\_ p


7 You have . You buy .

How much change do you get? \_\_\_\_\_ p

8 You have . You win .

How much do you have now? \_\_\_\_\_ p

9 Which month comes after March? \_\_\_\_\_

10  What time is it? \_\_\_\_\_

## B Answer

1  $6 + 10 + 1 =$  \_\_\_\_\_

2  $16 + 10 + 1 =$  \_\_\_\_\_

3  $26 + 10 + 1 =$  \_\_\_\_\_

4  $36 + 11 =$  \_\_\_\_\_

5  $24 + 11 =$  \_\_\_\_\_

6  $17 - 10 - 1 =$  \_\_\_\_\_

7  $27 - 10 - 1 =$  \_\_\_\_\_

8  $37 - 10 - 1 =$  \_\_\_\_\_

9  $\square - 11 = 46$  \_\_\_\_\_

10  $\square + 11 = 45$  \_\_\_\_\_

## C Answer

1 Add 7 and 11. \_\_\_\_\_

2 Take 5 from 11. \_\_\_\_\_

3 The total of 8 and 11 is \_\_\_\_\_

4 The difference between 11 and 6 is \_\_\_\_\_

5 The sum of 11 and 9 is \_\_\_\_\_

6 11 is 7 more than \_\_\_\_\_

7 Subtract 9 from 11. \_\_\_\_\_

8 11 minus 4 is \_\_\_\_\_

9 8 less than 11 is \_\_\_\_\_

10 11 plus 6 is \_\_\_\_\_